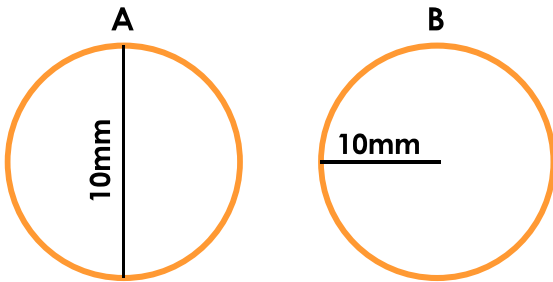


## Circles

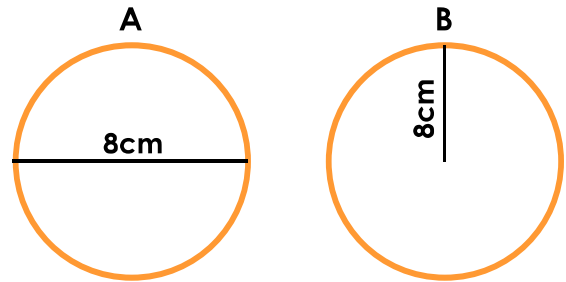
## Circles

1a. Tick the circle which has a radius of 10mm.



VF

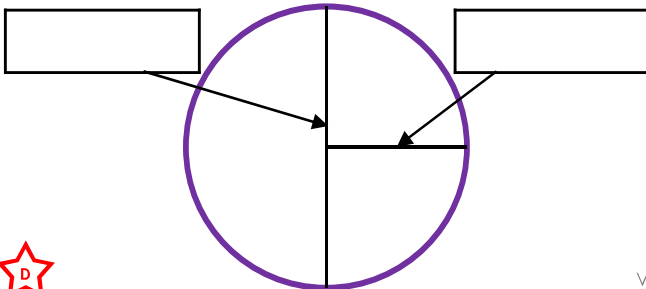
1b. Tick the circle which has a diameter of 8cm.



VF

2a. Use the measurements below to label the radius and diameter.

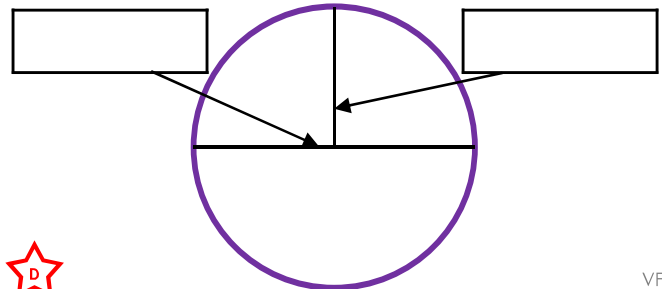
6cm                      12cm



VF

2b. Use the measurements below to label the radius and diameter.

10mm                      5mm



VF

3a. Match each diameter to its radius.

16m

4m

8m

8m

4m

7m



14m

2m

VF

3b. Match each radius to its diameter.

3m

24m

1m

18m

12m

6m

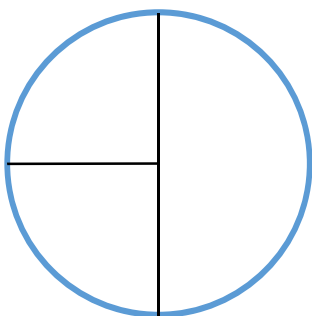


9m

2m

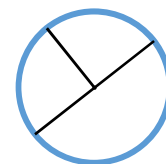
VF

4a. Use your ruler to measure the radius and diameter.



VF

4b. Use your ruler to measure the radius and diameter.

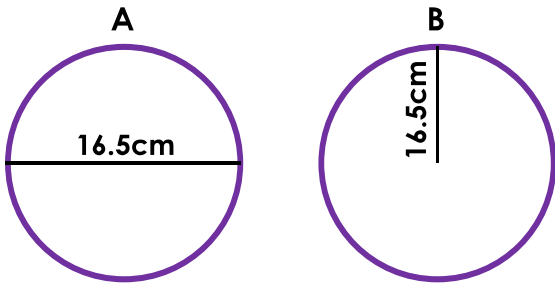


VF

## Circles

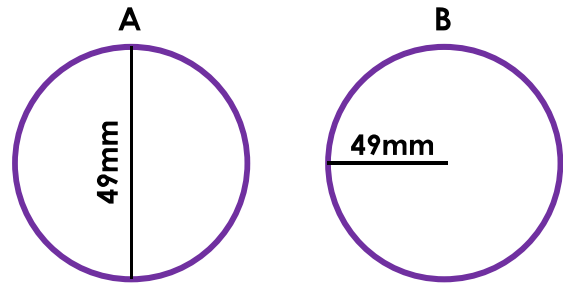
## Circles

5a. Tick the circle which has a radius of 16.5cm.



VF

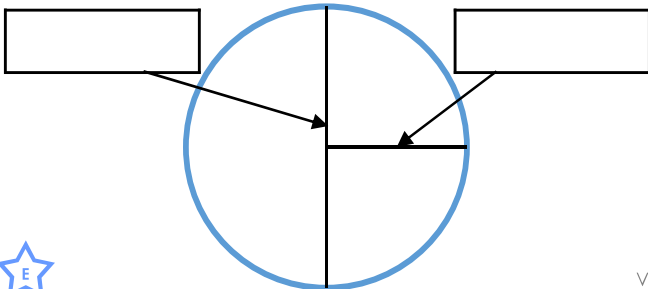
5b. Tick the circle which has a diameter of 49mm.



VF

6a. Use the measurements below to label the radius and diameter.

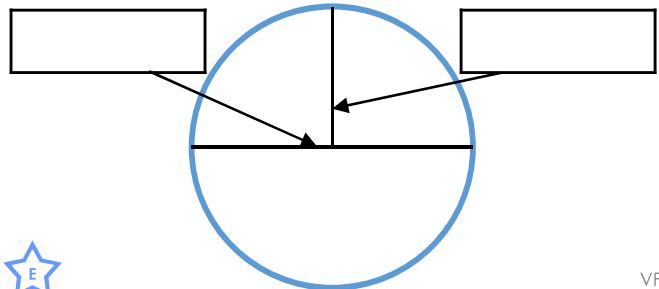
54mm                  27mm



VF

6b. Use the measurements below to label the radius and diameter.

9.5cm                  19cm



VF

7a. Match each diameter to its radius.

91m	43.5m
87m	37.5m
63m	45.5m
75m	31.5m



VF


7b. Match each radius to its diameter.

49.5m	107m
53.5m	99m
25.5m	83m
41.5m	51m




VF

8a. Use your ruler to draw and measure the radius and diameter.



VF

8b. Use your ruler to draw and measure the radius and diameter.

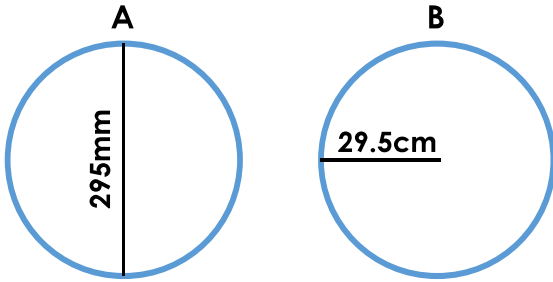


VF

## Circles

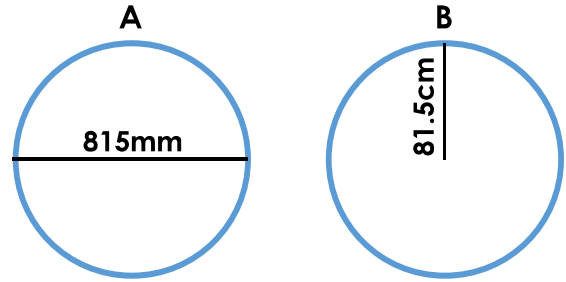
## Circles

9a. Tick the circle which has a radius of 295mm.



VF

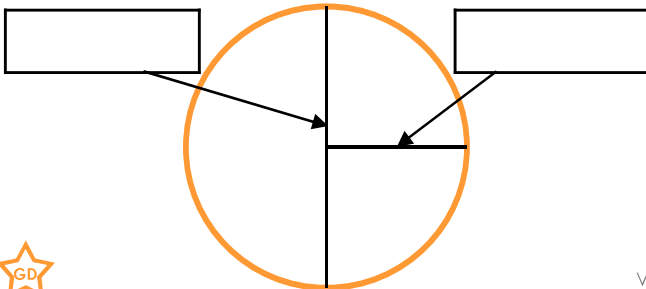
9b. Tick the circle which has a diameter of 81.5cm.



VF

10a. Use the measurements below to label the radius and diameter.

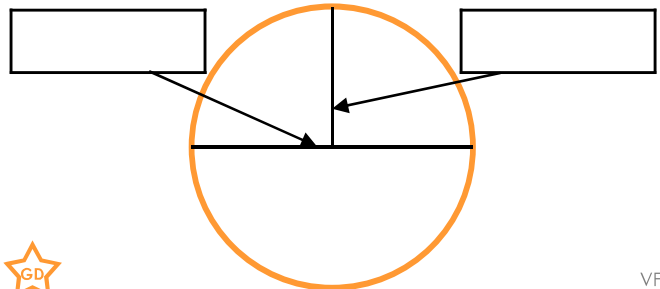
7.5m                      375cm



VF

10b. Use the measurements below to label the radius and diameter.

0.9m                      450mm



VF

11a. Match each diameter to its radius.

5m	675mm
13.5cm	250cm
94mm	850cm
17m	4.7cm



VF


11b. Match each radius to its diameter.

35cm	83cm
415mm	150cm
0.75m	0.39m
19.5cm	700mm




VF

12a. Use your ruler to draw and measure the radius and diameter.



VF

12b. Use your ruler to draw and measure the radius and diameter.



VF