






# Let's go to the Seaside

When should we catch the train?



What time do the trains leave? Draw the hands on the clocks.





Quarter past five

Twenty-five to eight

Ten o'clock

Ten to three

What time do the trains leave? What time do the clocks say?







Fill in the timetable with the missing digital times.


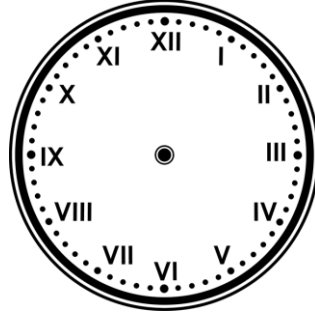
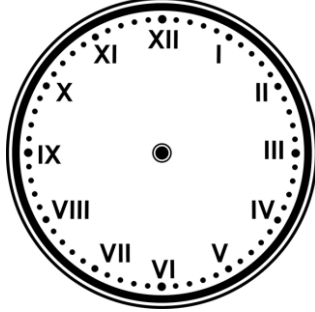

The train leaves every half an hour.		11:00			
The train leaves every quarter of an hour.	8:15				9:15
The train leaves on the hour.			9:00		
The train leaves every 20 minutes.	9:00			10:00	

# Let's go to the Seaside

When should we catch the train?



What time do the trains leave? Draw the hands on the clocks.





Twenty-two minutes past five

12:32pm

Seventeen minutes to three

23:37

What time do the clocks say? Use the 24 hour clock for your answers



Morning			
10:19	:	00:39	:
Afternoon/Evening			
:	19:52	:	:

The times for the train timetable have been muddled up. Put them in order from earliest to latest.

3:35pm 6:58am 10:26am 9:32am 4:05pm 10:37am

Timetable for trains to the seaside					
:	:	:	:	:	:

Fill in the timetable with the missing times.

The train leaves every 12 minutes.	:	08:00	:	:	:	:	:	:
The train leaves every 6 minutes.	:	:	13:54	:	:	:	14:18	:

# Let's go to the Seaside

## When should we catch the train?



What time do the trains leave?

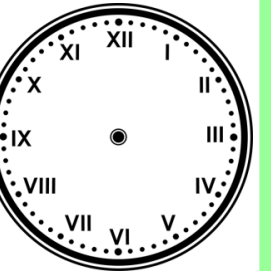
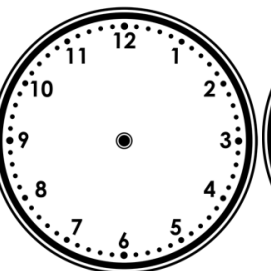
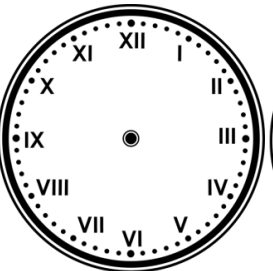
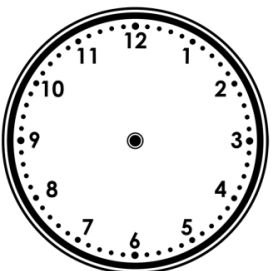

Fifteen minutes to five in the evening

Twenty-two minutes past seven in the evening.

Twenty-four minutes to eight in the morning

Nineteen minutes past ten in the evening

Twelve minutes to eleven in the morning



12 Hour Clock:

 : 
 : 
 : 
 : 
 : 



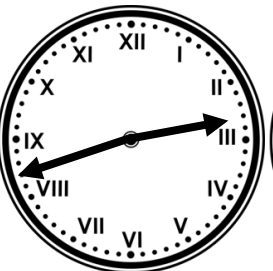


24 Hour Clock:

 : 
 : 
 : 
 : 
 : 

How long does each train journey take?

Train	Train 1	Train 2	Train 3	Train 4	Train 5
Leaves at	07:45	:	08:15	05:00	16:30
Journey takes	5 and a half hours	195 minutes	3 hours and 25 minutes		270 minutes
Arrives at	:	15:30	:	07:50	:

Complete each clock with the correct before or after time:



1 hour and 5 minutes later

153 minutes earlier

63 minutes later

3 hours and 6 minutes earlier

6 hours and 17 minutes earlier

