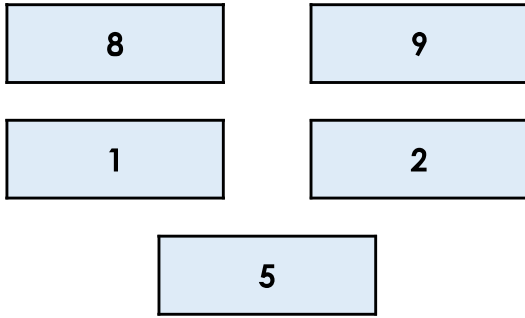


The Mean

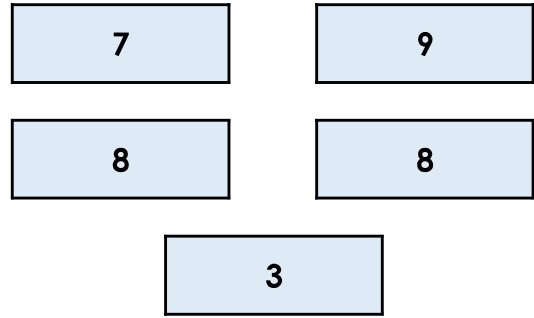
The Mean

1a. Calculate the mean of these numbers.



VF

1b. Calculate the mean of these numbers.



VF


2a. Tick the correct mean of these children's test scores.



13 14 15

VF

2b. Tick the correct mean of these children's Sports Day scores.



21 22 23

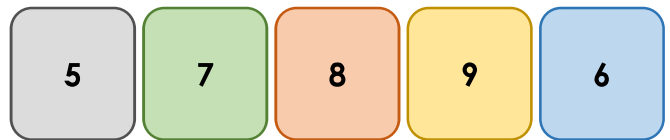
VF

3a. True or false? The mean of these numbers is 8.



VF

3b. True or false? The mean of these numbers is 7.



VF

4a. Four friends want to share out their sweets equally. They have 8, 4, 7 and 9 sweets.



What is the mean amount of sweets?



VF

4b. Four friends want to share their toys out equally. They have 9, 8, 3 and 12 toys.



What is the mean amount of toys?



VF

The Mean

The Mean

5a. Calculate the mean of these numbers.

7.3	12
13.4	8
6	25.3



VF

5b. Calculate the mean of these numbers.

26	15.1
8.8	11
6	41.1



VF

6a. Tick the correct mean of these children's test scores.



20	24	23
----	----	----



VF

6b. Tick the correct mean of these children's Sports Day scores.



24	25	26
----	----	----



VF

7a. True or false? The mean of these numbers is 16.

12.4	17	13.1
16.3	18.2	19



VF

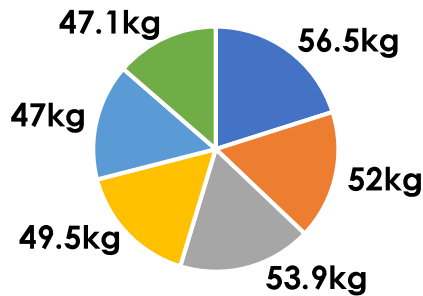
7b. True or false? The mean of these numbers is 19.

24.7	33	8.8
12.6	25	15.9



VF

8a. The chart below shows the weight of six different chimpanzees.



What is their mean weight?



VF

8b. The table below shows how much six friends spent on sweets.

Leon	£1.64
Alice	£0.65
Chloe	£2.33
Noah	£1.62
Jamie	£3.25
Samantha	£2.51



What is the mean amount they spent?




VF

The Mean


The Mean

9a. Calculate the mean of these numbers.



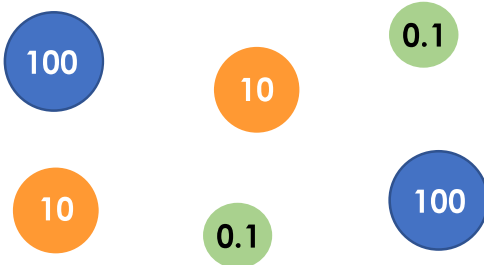
VF

9b. Calculate the mean of these numbers.



VF

10a. Calculate the mean value of the place value counters.



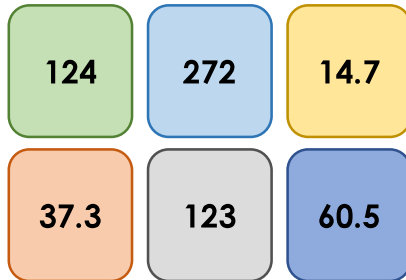
VF

10b. Calculate the mean of these coins.



VF

11a. True or false? The mean of these numbers is $108\frac{1}{4}$.




VF

11b. True or false? The mean of these numbers is $220\frac{1}{3}$.



VF

12a. Six children have been growing plants and want to calculate the mean height. They measure 12cm, 204mm, 0.17m, 18.3cm, 167mm, 0.14m.



What is their mean height in cm?



VF

12b. Six friends want to calculate their mean height. They measure 1.43m, 136cm, 1.4m, 139cm, 1410mm, 1350mm.



What is their mean height in metres?



VF