

The Mean

1. The following scores are the total points that the Rugby Rangers have scored in each of their last five games. Calculate their mean score.



25

27

13

6

9



VF
HW/Ext

2. Calculate the mean distance these children ran during a fun run.



3km



2km



7km



4km



9km




VF
HW/Ext

3. Simona is shopping. She says,



I bought three different items.
The mean cost of my
shopping total is £2.00.



What are the prices of the three items Simona bought?



RPS
HW/Ext

The Mean

4. The following scores are Bo Harah's track times, in minutes, from his last six 10,000m races. Calculate his mean track time.



30:00

31:00

30:30

29:00

27:30

32:00



VF
HW/Ext

5. Calculate the mean distance these children travel to school.



0.8km



1.2km



2.4km



0.6km



2.3km



4.7km



VF
HW/Ext

6. Nate is shopping. He says,



I bought four different items.
The mean cost of my
shopping total is £3.00.




What are the prices of the four items Nate bought?



RPS
HW/Ext

The Mean

7. The following scores are Becky Hadlington's lap times, in minutes, from her last six 1,500m races. Calculate her mean lap time.



15:30

16:30

16:30

15:45


16:15

17:00



VF
HW/Ext

8. Calculate the mean distance of these children's long jump scores in metres.



3,490mm

2,470mm

291cm

3.61m

442cm

3.38m



VF
HW/Ext

9. Harriet is shopping. She says,



I bought six different items.
The mean cost of my shopping total is £3.45.

£5.22

£3.25

£1.48

£5.75

73p

£4.25

£3.27

What are the prices of the six items Harriet bought?



RPS
HW/Ext