

Varied Fluency

Step 7: Find the Total

National Curriculum Objectives:

Mathematics Year 2: (2M3a) [Recognise and use symbols for pounds \(£\) and pence \(p\); combine amounts to make a particular value](#)

Mathematics Year 2: (2M3b) [Find different combinations of coins that equal the same amounts of money](#)

Differentiation:

Developing Questions to support finding the total of different amounts of money. Includes adding 2 or 3 written amounts. Amounts are multiples of 5, using images to support.

Expected Questions to support finding the total of different amounts of money. Includes adding up to 3 amounts, including written amounts and images.

Greater Depth Questions to support finding the total of different amounts of money. Includes written amounts and images, with some use of multiple coins of the same value.

More [Year 2 Money](#) resources.

Did you like this resource? Don't forget to [review](#) it on our website.

Find the Total

1a. Find the total of the amounts.

50p



20p



5 pence



VF

Find the Total

1b. Find the total of the amounts.

10p



5p



20 pence



VF

2a. Match the amounts to the totals.

20p

5 pence

A.



£10 and 20p

50 pence

10p

B.



25p

20 pence

£10

C.



60 pence



VF

2b. Match the amounts to the totals.

£5

£15

A.



£1 and 10p

1 pound

10p

B.



55 pence

50p

5 pence

C.



20 pounds



VF

3a. Tick the correct total of the 2 amounts.

70p



10p



A.

B.

C.

50 pence



90p



80 pence



VF

3b. Tick the correct total of the 2 amounts.

15p



20p



A.

B.

C.

50 pence



30p

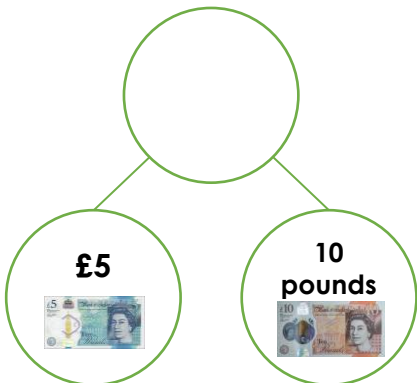


35 pence



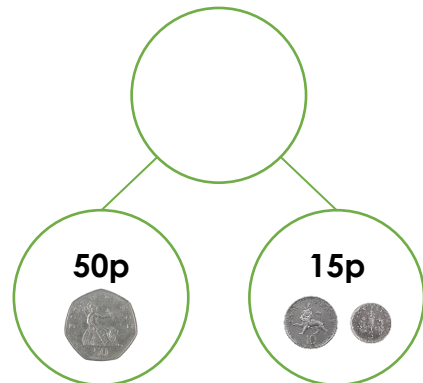
VF

4a. Complete the part-whole model.



VF

4b. Complete the part-whole model.



VF

Find the Total

5a. Find the total of the amounts.

£2

5 pounds



VF

Find the Total

5b. Find the total of the amounts.

23p

1 pound



VF

6a. Match the amounts to the totals.

A. £2



1 pound

£10 and
27p

B. 50p

5 pence



4
pounds

C. £1



17p

57p



VF

6b. Match the amounts to the totals.

A. 20p



5
pence

8
pounds

B. 1
pound



38p

75
pence

C. £1



£1 and
88p



VF

7a. Tick the correct total of the 3 amounts.

£4



£2



£3



A.

B.

C.

5 pounds

£9



VF

7b. Tick the correct total of the 3 amounts.

£5



£7



£4



A.

B.

C.

£11

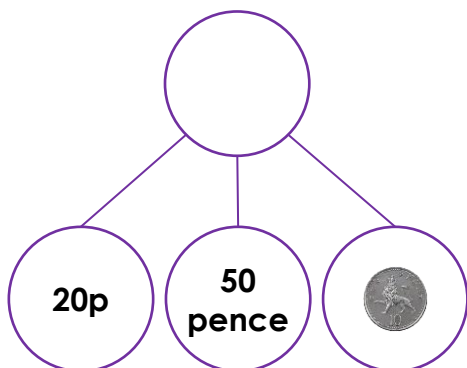


16 pounds



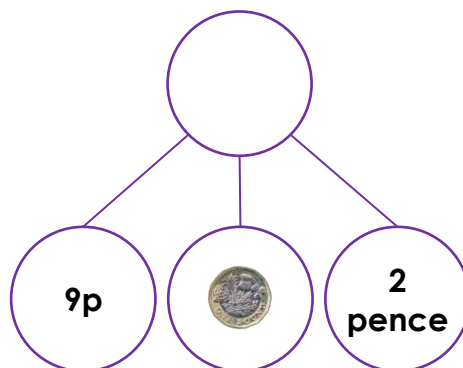
VF

8a. Complete the part-whole model.



VF

8b. Complete the part-whole model.



VF

Find the Total

9a. Find the total of the amounts.

20p

2 ten-pence coins

£1



VF

Find the Total

9b. Find the total of the amounts.

50 pence

5 one-pound coins

23p



VF

10a. Match the amounts to the totals.

A. 2 two-pound coins



5p

£8 and 40p

B. £1



2 five-pound notes

£4 and 25p

C. £3



40p

12 pounds



VF

10b. Match the amounts to the totals.

A. 3 pence



four 20p coins

£7 and 4p

B. 2 two-pence coins



£2

£4 and 99p

C. 49p



4 one-pound coins

85 pence



VF

11a. Tick the correct total of the 4 amounts.



A.

B.

C.

4 one-pound coins and 32p



£4 and 4 ten-pence coins



VF

11b. Tick the correct total of the 4 amounts.



A.

B.

C.

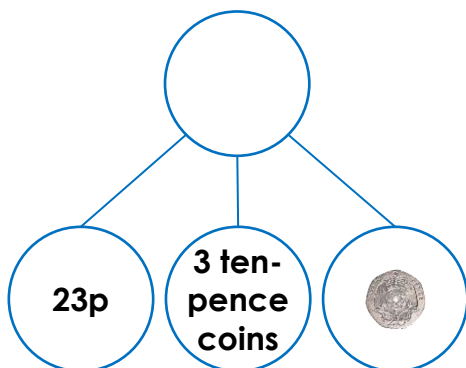
£2 and 77p

2 one-pound coins and 67p



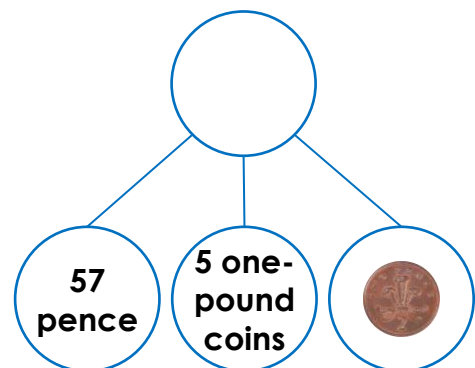
VF

12a. Complete the part-whole model.



VF

12b. Complete the part-whole model.



VF

Varied Fluency
Find the Total

Developing

- 1a. 75p
2a. A. 25p; B. 60 pence; C. £10 and 20p
3a. C
4a. £15

Expected

- 5a. £8
6a. A. 4 pounds; B. 57p; C. £10 and 27p
7a. B
8a. 80p

Greater Depth

- 9a. £1 and 45p
10a. A. £4 and 25p; B. 12 pounds; C. £8 and 40p
11a. A
12a. 73p

Varied Fluency
Find the Total

Developing

- 1b. 35p
2b. A. 20 pounds; B. £1 and 10p; C. 55 pence
3b. C
4b. 65p

Expected

- 5b. £1 and 28p
6b. A. 75 pence; B. £1 and 88p; C. 8 pounds
7b. C
8b. £1 and 11p

Greater Depth

- 9b. £5 and 73p
10b. A. 85 pence; B. £7 and 4p; C. £4 and 99p
11b. A
12b. £5 and 59p