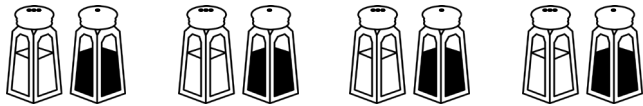


Count in 2s



1 Count in 2s to find the total.

a How many salt and pepper pots are there?



There are _____ salt and pepper pots in total.

b How many flip-flops are there?



There are _____ flip-flops in total.

c How many shoes are there?



There are _____ shoes in total.

d How many socks are there?



There are _____ socks in total.

e How many mittens are there?



There are _____ mittens in total.

f How many cherries are there?

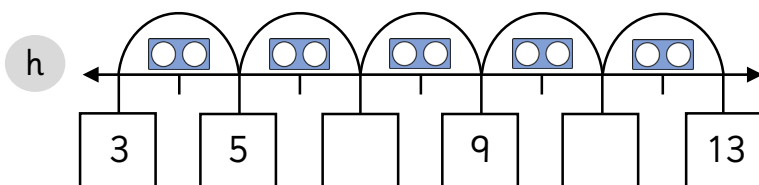
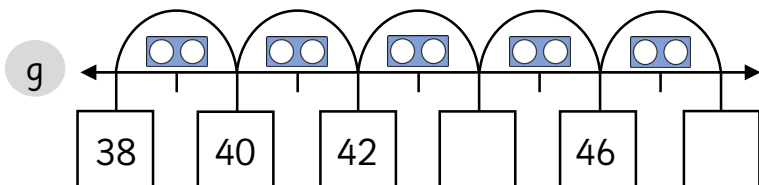
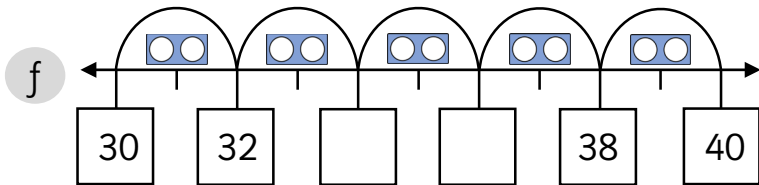
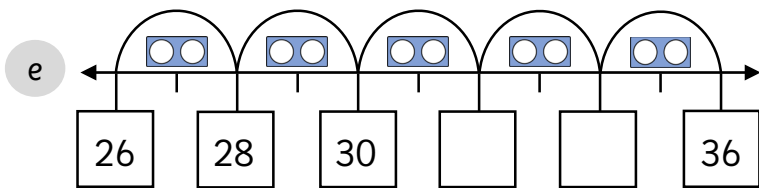
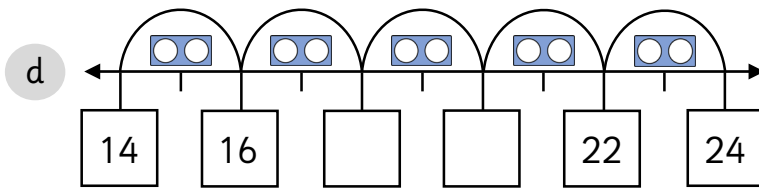
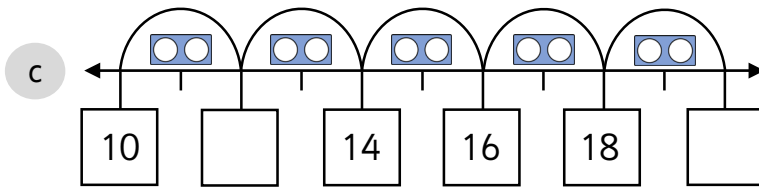
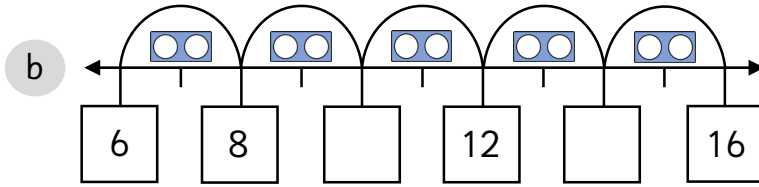
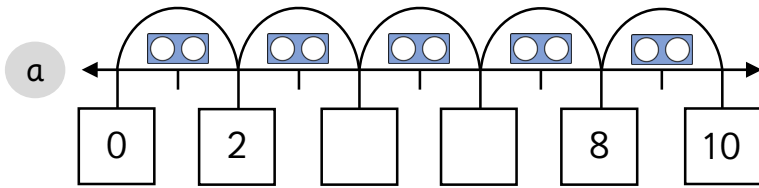


There are _____ cherries in total.

Count in 2s



1 Count in 2s to complete the number lines.



Count in 2s



1 Count in 2s to find the total.

a How many shoes are there?



There are _____ shoes in total.

b How many flip-flops are there?



There are _____ flip-flops in total.

c How many cherries are there?



There are _____ cherries in total.

2 Complete the number tracks.

a

6			12			18			24
---	--	--	----	--	--	----	--	--	----

b

		5				13	15		19
--	--	---	--	--	--	----	----	--	----

c

18				26		30		34	
----	--	--	--	----	--	----	--	----	--

d

	28	30				38	40		
--	----	----	--	--	--	----	----	--	--

e

25				33	35				43
----	--	--	--	----	----	--	--	--	----

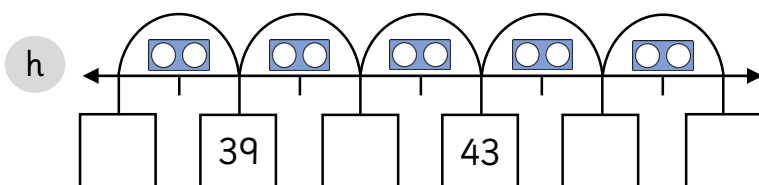
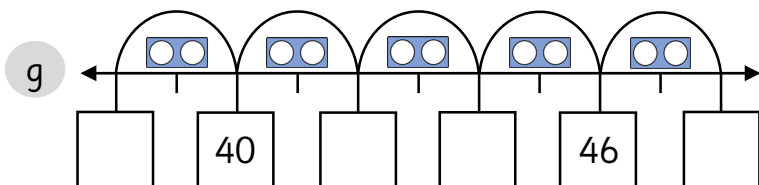
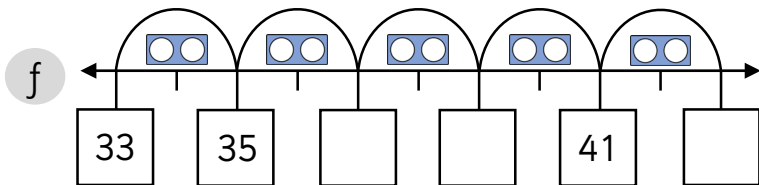
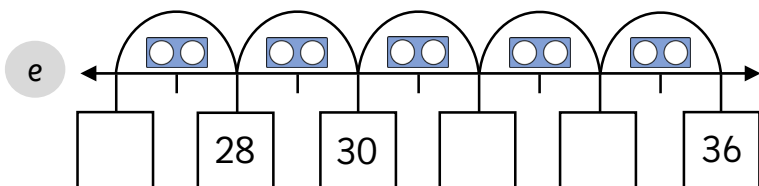
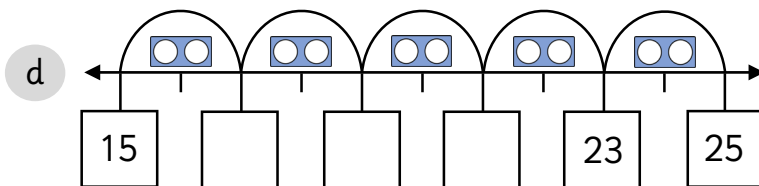
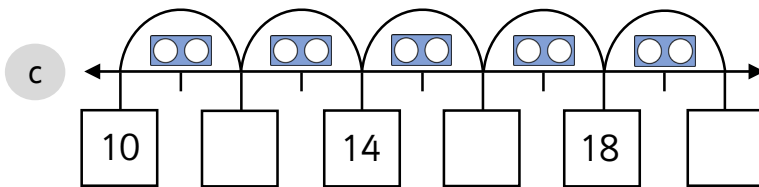
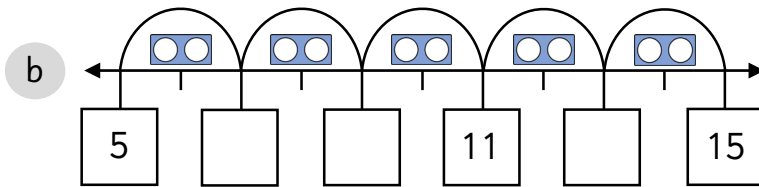
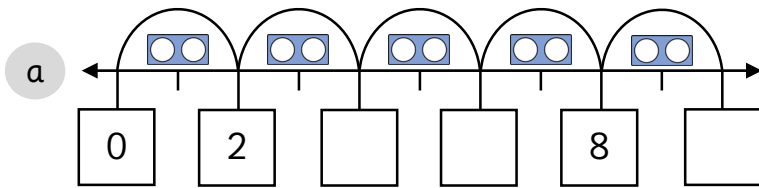
f

	34			40	42	44			
--	----	--	--	----	----	----	--	--	--

Count in 2s



1 Count in 2s to complete the number lines.



1 Complete the number tracks.

a

6					16				24
---	--	--	--	--	----	--	--	--	----

b

1	3								19
---	---	--	--	--	--	--	--	--	----

c

	20						32		36
--	----	--	--	--	--	--	----	--	----

d

26									44
----	--	--	--	--	--	--	--	--	----

e

				33					43
--	--	--	--	----	--	--	--	--	----

f

							46		50
--	--	--	--	--	--	--	----	--	----

2 Complete the following word problems.

a There are 8 pencils. There are 2 pencils in each pot.

How many pots are there? _____.

b There are 20 apples. There are 2 apples in each bowl.

How many bowls are there? _____.

c There are 18 fish. There are 9 fish in each tank.

How many fish tanks are there? _____.

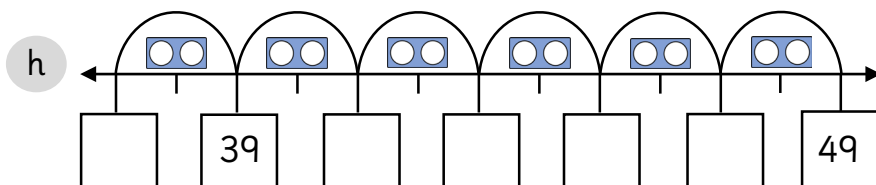
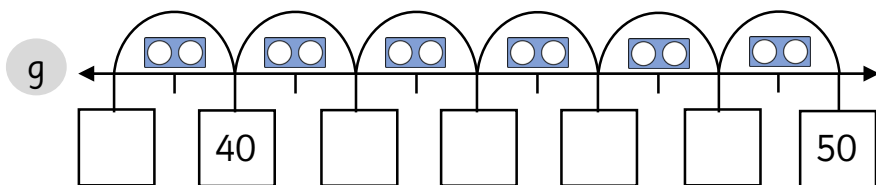
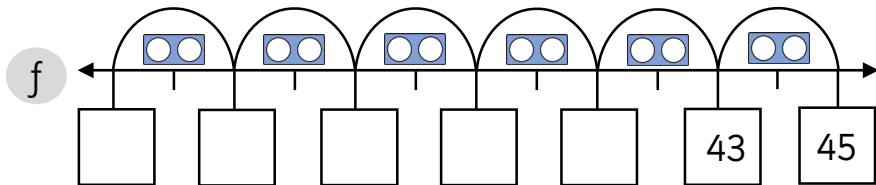
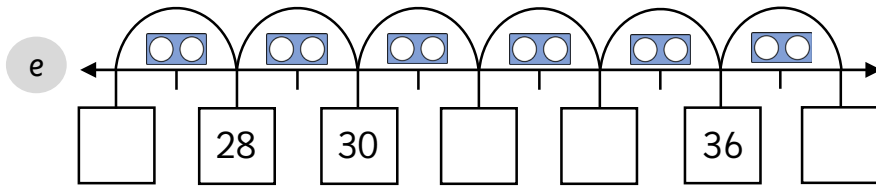
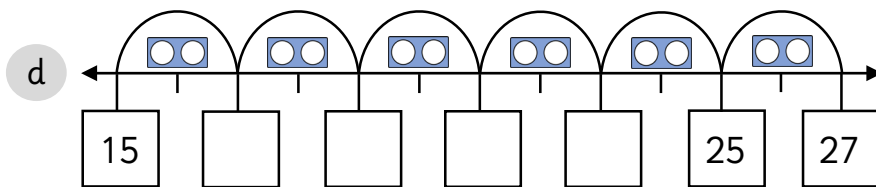
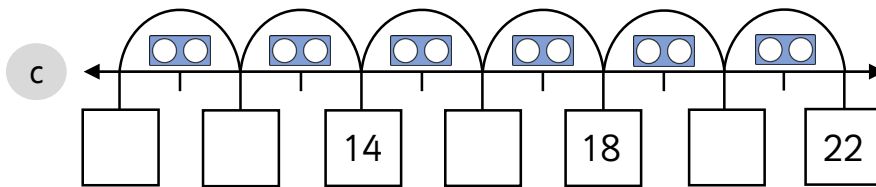
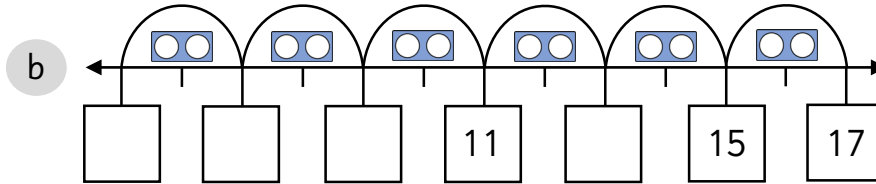
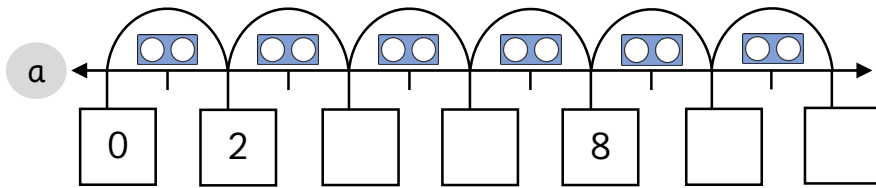
d There are 14 sweets. There are 7 sweets in each bag.

How many bags are there? _____.

Count in 2s



1 Count in 2s to complete the number lines.



Answers

To avoid wasting paper & ink,
please do not print this page.

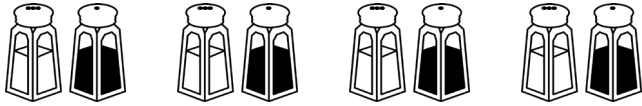


Count in 2s



1 Count in 2s to find the total.

a How many salt and pepper pots are there?



There are 8 salt and pepper pots in total.

b How many flip-flops are there?



There are 10 flip-flops in total.

c How many shoes are there?



There are 18 shoes in total.

d How many socks are there?



There are 16 socks in total.

e How many mittens are there?



There are 12 mittens in total.

f How many cherries are there?

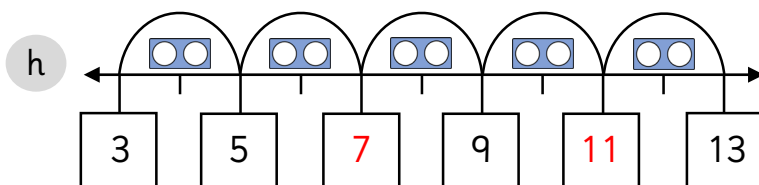
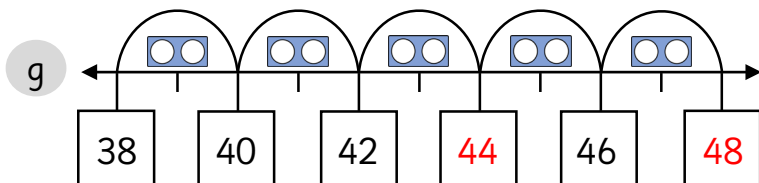
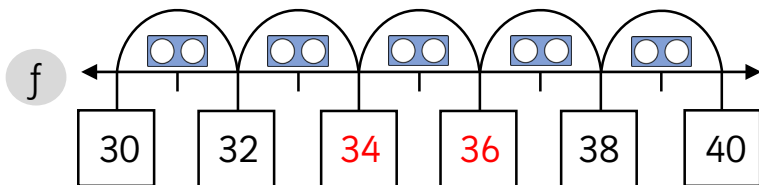
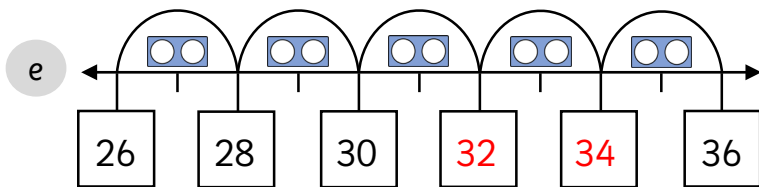
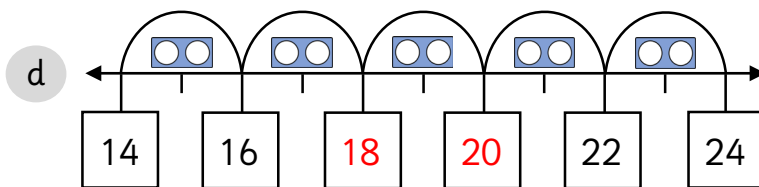
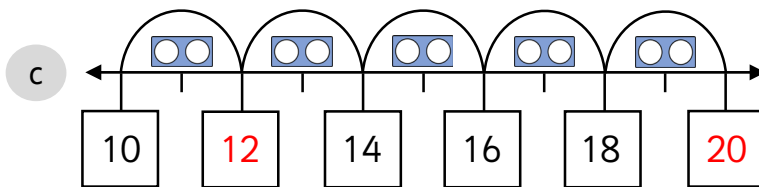
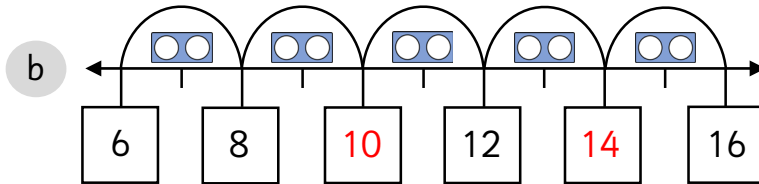
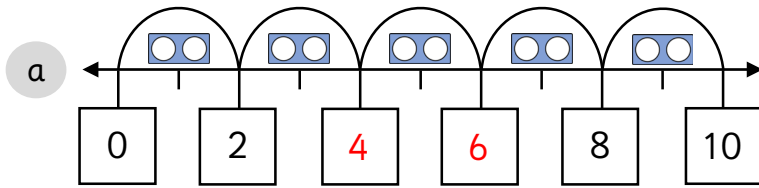


There are 20 cherries in total.

Count in 2s



1 Count in 2s to complete the number lines.



Count in 2s



1 Count in 2s to find the total.

a How many shoes are there?



There are 20 shoes in total.

b How many flip-flops are there?



There are 16 flip-flops in total.

c How many cherries are there?



There are 26 cherries in total.

2 Complete the number tracks.

a

6	8	10	12	14	16	18	20	22	24
---	---	----	----	----	----	----	----	----	----

b

1	3	5	7	9	11	13	15	17	19
---	---	---	---	---	----	----	----	----	----

c

18	20	22	24	26	28	30	32	34	36
----	----	----	----	----	----	----	----	----	----

d

26	28	30	32	34	36	38	40	42	44
----	----	----	----	----	----	----	----	----	----

e

25	27	29	31	33	35	37	39	41	43
----	----	----	----	----	----	----	----	----	----

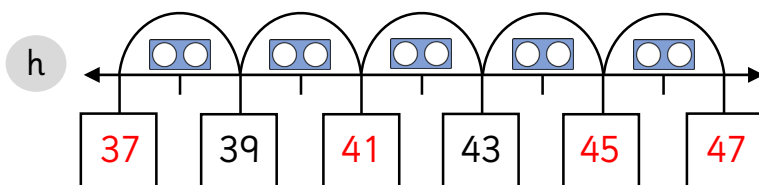
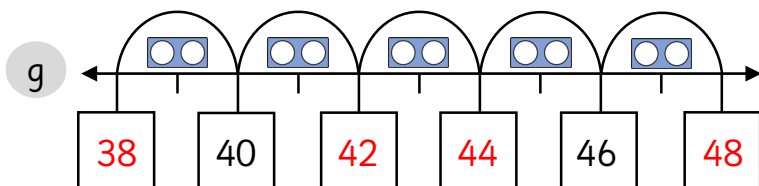
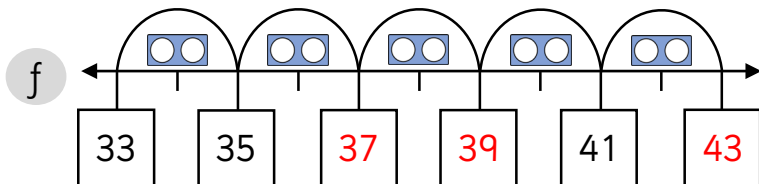
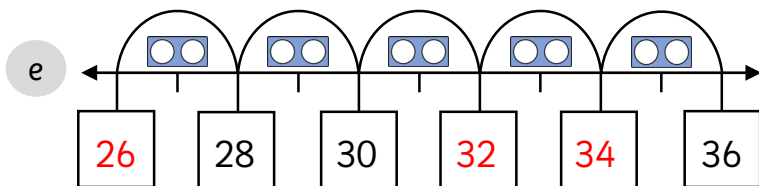
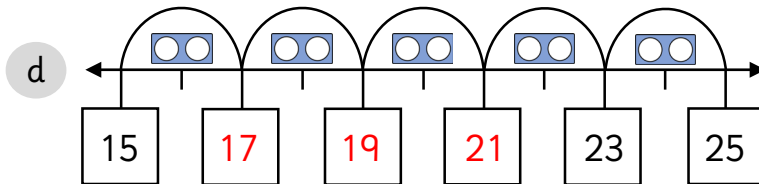
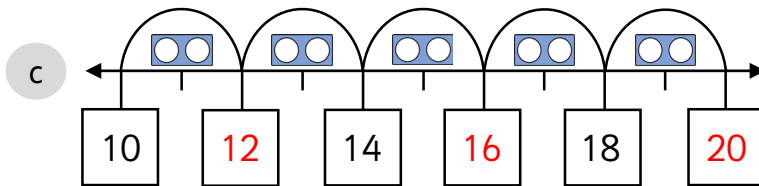
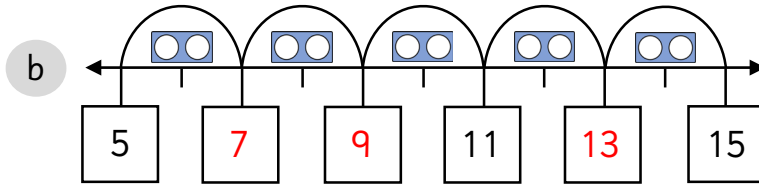
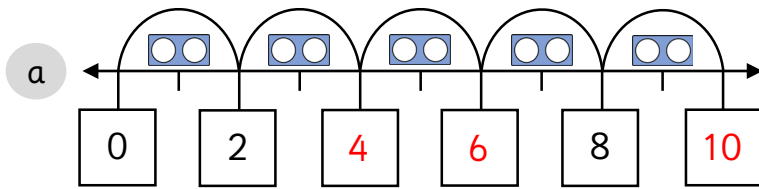
f

32	34	36	38	40	42	44	46	48	50
----	----	----	----	----	----	----	----	----	----

Count in 2s



1 Count in 2s to complete the number lines.



1 Complete the number tracks.

a

6	8	10	12	14	16	18	20	22	24
---	---	----	----	----	----	----	----	----	----

b

1	3	5	7	9	11	13	15	17	19
---	---	---	---	---	----	----	----	----	----

c

18	20	22	24	26	28	30	32	34	36
----	----	----	----	----	----	----	----	----	----

d

26	28	30	32	34	36	38	40	42	44
----	----	----	----	----	----	----	----	----	----

e

25	27	29	31	33	35	37	39	41	43
----	----	----	----	----	----	----	----	----	----

f

32	34	36	38	40	42	44	46	48	50
----	----	----	----	----	----	----	----	----	----

2 Complete the following word problems.

a There are 8 pencils. There are 2 pencils in each pot.

How many pots are there? 4.

b There are 20 apples. There are 2 apples in each bowl.

How many bowls are there? 10.

c There are 18 fish. There are 9 fish in each tank.

How many fish tanks are there? 2.

d There are 14 sweets. There are 7 sweets in each bag.

How many bags are there? 2.

Count in 2s



1 Count in 2s to complete the number lines.

